

The University of the State of New York
REGENTS HIGH SCHOOL EXAMINATION

PHYSICAL SETTING PHYSICS

Wednesday, June 22, 2005 — 1:15 to 4:15 p.m., only

The answer sheet for Part A and Part B–1 is the last page of this examination booklet. Turn to the last page and fold it along the perforations. Then, slowly and carefully, tear off the answer sheet and fill in the heading.

The answer booklet for Part B–2 and Part C is stapled in the center of this examination booklet. Open the examination booklet, carefully remove the answer booklet, and close the examination booklet. Then fill in the heading of your answer booklet.

You are to answer *all* questions in all parts of this examination according to the directions provided in the examination booklet. Record your answers to the Part A and Part B–1 multiple-choice questions on your separate answer sheet. Write your answers to the Part B–2 and Part C questions in your answer booklet. All work should be written in pen, except for graphs and drawings, which should be done in pencil. You may use scrap paper to work out the answers to the questions, but be sure to record all your answers on the answer sheet and in the answer booklet.

When you have completed the examination, you must sign the statement printed at the end of your separate answer sheet, indicating that you had no unlawful knowledge of the questions or answers prior to the examination and that you have neither given nor received assistance in answering any of the questions during the examination. Your answer sheet and answer booklet cannot be accepted if you fail to sign this declaration.

Notice. . .

A scientific or graphing calculator, a centimeter ruler, a protractor, and a copy of the *2002 Edition Reference Tables for Physical Setting/Physics*, which you may need to answer some questions in this examination, must be available for your use while taking this examination.

The use of any communications device is strictly prohibited when taking this examination. If you use any communications device, no matter how briefly, your examination will be invalidated and no score will be calculated for you.

DO NOT OPEN THIS EXAMINATION BOOKLET UNTIL THE SIGNAL IS GIVEN.

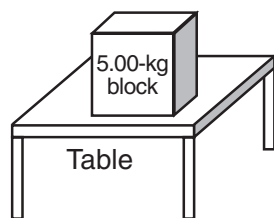
Part A

Answer all questions in this part.

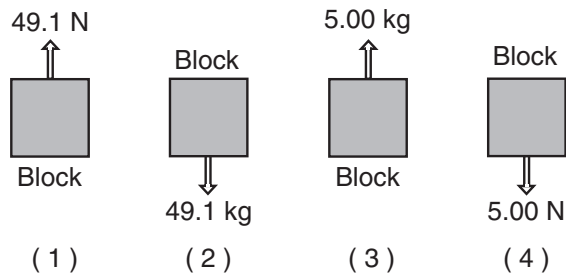
Directions (1–35): For *each* statement or question, write on the separate answer sheet the *number* of the word or expression that, of those given, best completes the statement or answers the question.

- 1 A 2.0-kilogram body is initially traveling at a velocity of 40. meters per second east. If a constant force of 10. newtons due east is applied to the body for 5.0 seconds, the final speed of the body is
 - (1) 15 m/s
 - (2) 25 m/s
 - (3) 65 m/s
 - (4) 130 m/s
- 2 An object is dropped from rest and falls freely 20. meters to Earth. When is the speed of the object 9.8 meters per second?
 - (1) during the entire first second of its fall
 - (2) at the end of its first second of fall
 - (3) during its entire time of fall
 - (4) after it has fallen 9.8 meters
- 3 A 5.0-newton force and a 7.0-newton force act concurrently on a point. As the angle between the forces is increased from 0° to 180° , the magnitude of the resultant of the two forces changes from
 - (1) 0.0 N to 12.0 N
 - (2) 2.0 N to 12.0 N
 - (3) 12.0 N to 2.0 N
 - (4) 12.0 N to 0.0 N
- 4 A 5.0-newton force could have perpendicular components of
 - (1) 1.0 N and 4.0 N
 - (2) 2.0 N and 3.0 N
 - (3) 3.0 N and 4.0 N
 - (4) 5.0 N and 5.0 N
- 5 A golf ball is hit at an angle of 45° above the horizontal. What is the acceleration of the golf ball at the highest point in its trajectory? [Neglect friction.]
 - (1) 9.8 m/s^2 upward
 - (2) 9.8 m/s^2 downward
 - (3) 6.9 m/s^2 horizontal
 - (4) 0.0 m/s^2
- 6 At the circus, a 100.-kilogram clown is fired at 15 meters per second from a 500.-kilogram cannon. What is the recoil speed of the cannon?
 - (1) 75 m/s
 - (2) 15 m/s
 - (3) 3.0 m/s
 - (4) 5.0 m/s
- 7 A ball is thrown horizontally at a speed of 24 meters per second from the top of a cliff. If the ball hits the ground 4.0 seconds later, approximately how high is the cliff?
 - (1) 6.0 m
 - (2) 39 m
 - (3) 78 m
 - (4) 96 m
- 8 Which cart has the greatest inertia?
 - (1) a 1-kilogram cart traveling at a speed of 4 m/s
 - (2) a 2-kilogram cart traveling at a speed of 3 m/s
 - (3) a 3-kilogram cart traveling at a speed of 2 m/s
 - (4) a 4-kilogram cart traveling at a speed of 1 m/s
- 9 A container of rocks with a mass of 65.0 kilograms is brought back from the Moon's surface where the acceleration due to gravity is $1.62 \text{ meters per second}^2$. What is the weight of the container of rocks on Earth's surface?
 - (1) 638 N
 - (2) 394 N
 - (3) 105 N
 - (4) 65.0 N
- 10 An astronaut drops a hammer from 2.0 meters above the surface of the Moon. If the acceleration due to gravity on the Moon is $1.62 \text{ meters per second}^2$, how long will it take for the hammer to fall to the Moon's surface?
 - (1) 0.62 s
 - (2) 1.2 s
 - (3) 1.6 s
 - (4) 2.5 s
- 11 The spring in a scale in the produce department of a supermarket stretches 0.025 meter when a watermelon weighing $1.0 \times 10^2 \text{ newtons}$ is placed on the scale. The spring constant for this spring is
 - (1) $3.2 \times 10^5 \text{ N/m}$
 - (2) $4.0 \times 10^3 \text{ N/m}$
 - (3) 2.5 N/m
 - (4) $3.1 \times 10^{-2} \text{ N/m}$
- 12 A satellite weighs 200 newtons on the surface of Earth. What is its weight at a distance of one Earth radius above the surface of Earth?
 - (1) 50 N
 - (2) 100 N
 - (3) 400 N
 - (4) 800 N

- 13 The diagram below shows a 5.00-kilogram block at rest on a horizontal, frictionless table.



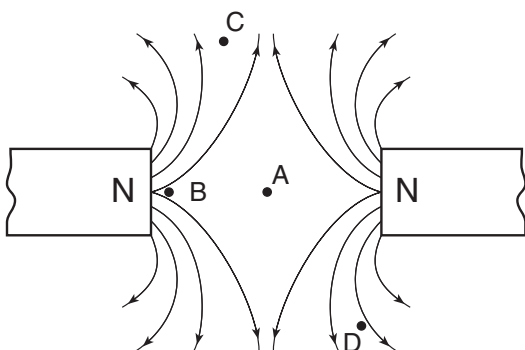
Which diagram best represents the force exerted on the block by the table?



- 14 Two positively charged masses are separated by a distance, r . Which statement best describes the gravitational and electrostatic forces between the two masses?

- (1) Both forces are attractive.
- (2) Both forces are repulsive.
- (3) The gravitational force is repulsive and the electrostatic force is attractive.
- (4) The gravitational force is attractive and the electrostatic force is repulsive.

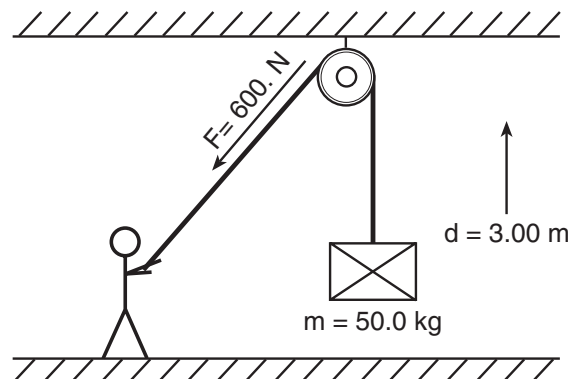
- 15 The diagram below shows the lines of magnetic force between two north magnetic poles.



At which point is the magnetic field strength greatest?

- (1) A
- (2) B
- (3) C
- (4) D

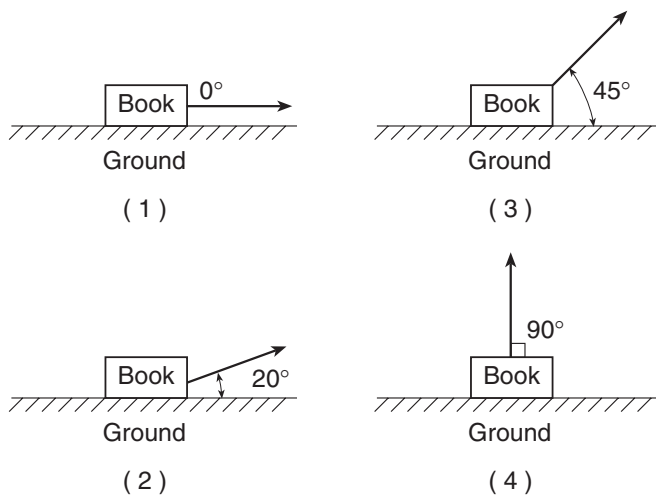
- 16 As shown in the diagram below, a student exerts an average force of 600. newtons on a rope to lift a 50.0-kilogram crate a vertical distance of 3.00 meters.



Compared to the work done by the student, the gravitational potential energy gained by the crate is

- (1) exactly the same
- (2) 330 J less
- (3) 330 J more
- (4) 150 J more

- 17 A 1.0-kilogram book resting on the ground is moved 1.0 meter at various angles relative to the horizontal. In which direction does the 1.0-meter displacement produce the greatest increase in the book's gravitational potential energy?



- 18 A 95-kilogram student climbs 4.0 meters up a rope in 3.0 seconds. What is the power output of the student?

- (1) $1.3 \times 10^2 \text{ W}$
- (2) $3.8 \times 10^2 \text{ W}$
- (3) $1.2 \times 10^3 \text{ W}$
- (4) $3.7 \times 10^3 \text{ W}$

19 What is the resistance at 20°C of a 1.50-meter-long aluminum conductor that has a cross-sectional area of 1.13×10^{-6} meter²?

- (1) $1.87 \times 10^{-3} \Omega$ (3) $3.74 \times 10^{-2} \Omega$
 (2) $2.28 \times 10^{-2} \Omega$ (4) $1.33 \times 10^6 \Omega$

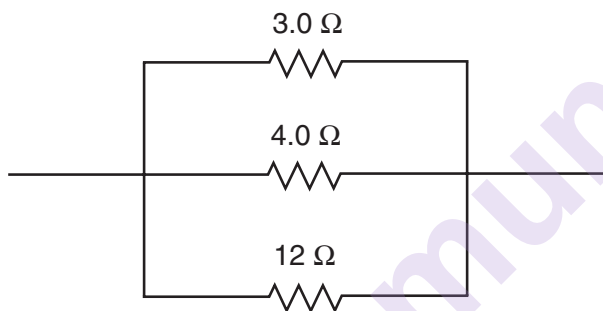
20 The resistance of a 60.-watt lightbulb operated at 120 volts is approximately

- (1) 720 Ω (3) 120 Ω
 (2) 240 Ω (4) 60. Ω

21 An immersion heater has a resistance of 5.0 ohms while drawing a current of 3.0 amperes. How much electrical energy is delivered to the heater during 200. seconds of operation?

- (1) $3.0 \times 10^3 \text{ J}$ (3) $9.0 \times 10^3 \text{ J}$
 (2) $6.0 \times 10^3 \text{ J}$ (4) $1.5 \times 10^4 \text{ J}$

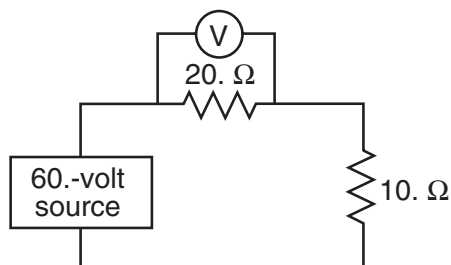
22 The diagram below represents part of an electric circuit containing three resistors.



What is the equivalent resistance of this part of the circuit?

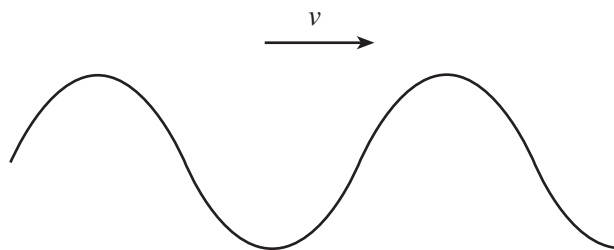
- (1) 0.67 Ω (3) 6.3 Ω
 (2) 1.5 Ω (4) 19 Ω

23 In the circuit represented by the diagram below, what is the reading of voltmeter V?

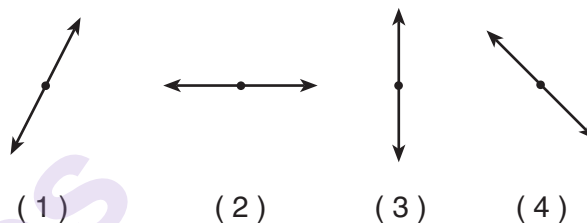


- (1) 20. V (3) 30. V
 (2) 2.0 V (4) 40. V

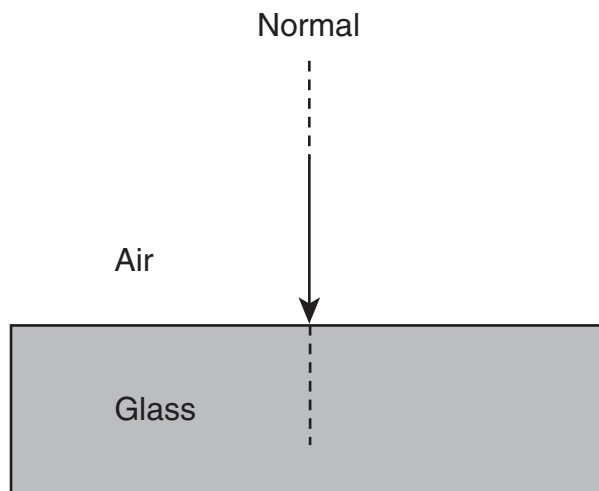
24 A transverse wave passes through a uniform material medium from left to right, as shown in the diagram below.



Which diagram best represents the direction of vibration of the particles of the medium?



25 The diagram below shows a ray of light passing from air into glass at an angle of incidence of 0° .

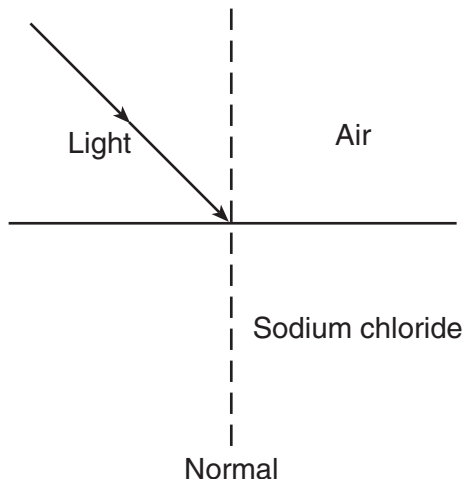


Which statement best describes the speed and direction of the light ray as it passes into the glass?

- (1) Only speed changes.
 (2) Only direction changes.
 (3) Both speed and direction change.
 (4) Neither speed nor direction changes.

Note that question 26 has only three choices.

- 26 A ray of monochromatic light is incident on an air-sodium chloride boundary as shown in the diagram below. At the boundary, part of the ray is reflected back into the air and part is refracted as it enters the sodium chloride.



Compared to the ray's angle of refraction in the sodium chloride, the ray's angle of reflection in the air is

- (1) smaller
 - (2) larger
 - (3) the same
- 27 Which pair of terms best describes light waves traveling from the Sun to Earth?
- (1) electromagnetic and transverse
 - (2) electromagnetic and longitudinal
 - (3) mechanical and transverse
 - (4) mechanical and longitudinal
- 28 Which wave characteristic is the same for all types of electromagnetic radiation traveling in a vacuum?
- (1) speed
 - (2) wavelength
 - (3) period
 - (4) frequency
- 29 If the speed of a wave doubles as it passes from shallow water into deeper water, its wavelength will be
- (1) unchanged
 - (2) doubled
 - (3) halved
 - (4) quadrupled

- 30 Radio waves diffract around buildings more than light waves do because, compared to light waves, radio waves

- (1) move faster
- (2) move slower
- (3) have a higher frequency
- (4) have a longer wavelength

- 31 A metal sphere has a net negative charge of 1.1×10^{-6} coulomb. Approximately how many more electrons than protons are on the sphere?

- (1) 1.8×10^{12}
- (2) 5.7×10^{12}
- (3) 6.9×10^{12}
- (4) 9.9×10^{12}

- 32 Light of wavelength 5.0×10^{-7} meter consists of photons having an energy of

- (1) 1.1×10^{-48} J
- (2) 1.3×10^{-27} J
- (3) 4.0×10^{-19} J
- (4) 1.7×10^{-5} J

- 33 Wave-particle duality is most apparent in analyzing the motion of

- (1) a baseball
- (2) a space shuttle
- (3) a galaxy
- (4) an electron

- 34 The tau neutrino, the muon neutrino, and the electron neutrino are all

- (1) leptons
- (2) hadrons
- (3) baryons
- (4) mesons

- 35 Which statement is true of the strong nuclear force?

- (1) It acts over very great distances.
- (2) It holds protons and neutrons together.
- (3) It is much weaker than gravitational forces.
- (4) It repels neutral charges.

Part B-1

Answer all questions in this part.

Directions (36–47): For *each* statement or question, write on the separate answer sheet the *number* of the word or expression that, of those given, best completes the statement or answers the question.

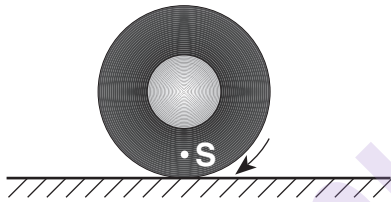
36 The approximate height of a 12-ounce can of root beer is

- (1) 1.3×10^{-3} m (3) 1.3×10^0 m
(2) 1.3×10^{-1} m (4) 1.3×10^1 m

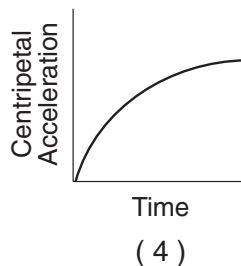
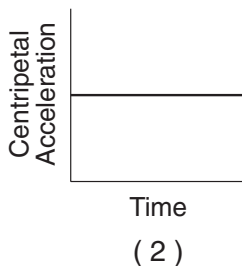
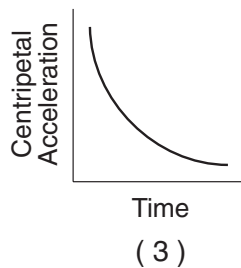
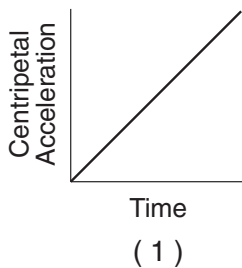
37 Which physical quantity is correctly paired with its unit?

- (1) power and watt•seconds
(2) energy and newton•seconds
(3) electric current and amperes/coulomb
(4) electric potential difference and joules/coulomb

38 In the diagram below, *S* is a point on a car tire rotating at a constant rate.



Which graph best represents the magnitude of the centripetal acceleration of point *S* as a function of time?



39 When a 1.53-kilogram mass is placed on a spring with a spring constant of 30.0 newtons per meter, the spring is compressed 0.500 meter. How much energy is stored in the spring?

- (1) 3.75 J (3) 15.0 J
(2) 7.50 J (4) 30.0 J

40 The current through a lightbulb is 2.0 amperes. How many coulombs of electric charge pass through the lightbulb in one minute?

- (1) 60. C (3) 120 C
(2) 2.0 C (4) 240 C

41 A 330.-ohm resistor is connected to a 5.00-volt battery. The current through the resistor is

- (1) 0.152 mA (3) 335 mA
(2) 15.2 mA (4) 1650 mA

Note that question 42 has only three choices.

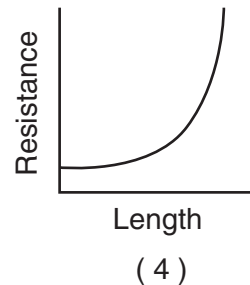
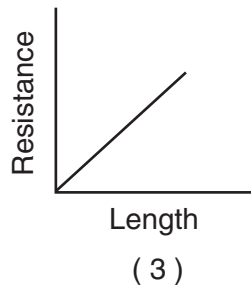
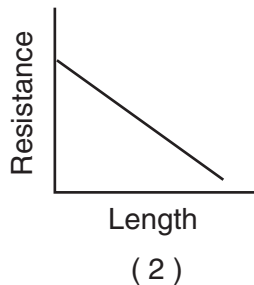
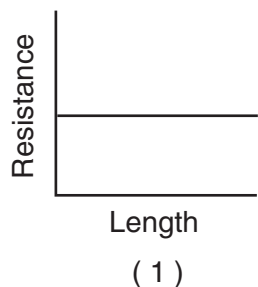
42 Compared to the period of a wave of red light the period of a wave of green light is

- (1) less
(2) greater
(3) the same

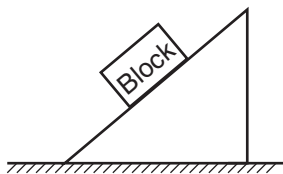
43 A hydrogen atom with an electron initially in the $n = 2$ level is excited further until the electron is in the $n = 4$ level. This energy level change occurs because the atom has

- (1) absorbed a 0.85-eV photon
(2) emitted a 0.85-eV photon
(3) absorbed a 2.55-eV photon
(4) emitted a 2.55-eV photon

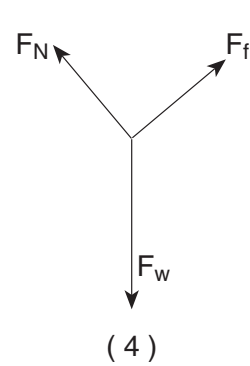
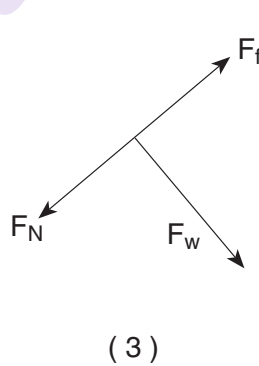
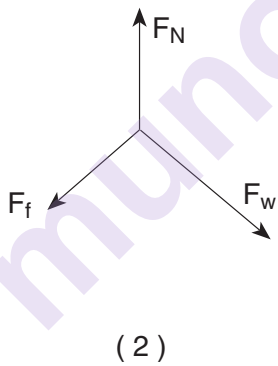
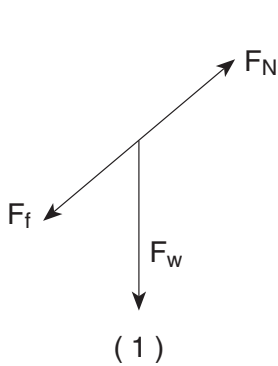
44 Which graph best represents the relationship between resistance and length of a copper wire of uniform cross-sectional area at constant temperature?



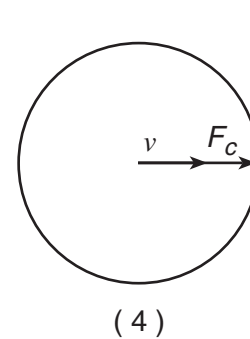
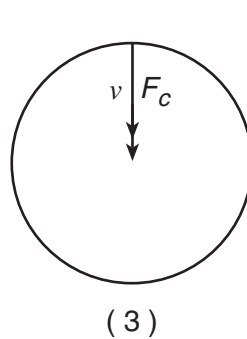
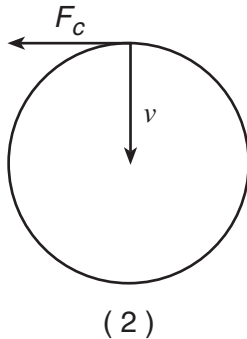
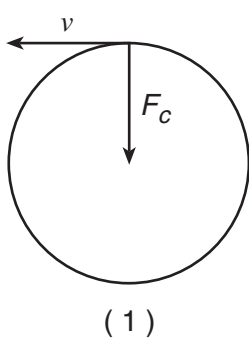
45 The diagram below represents a block at rest on an incline.



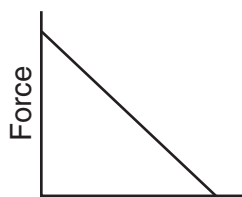
Which diagram best represents the forces acting on the block? (F_f = frictional force, F_N = normal force, and F_w = weight.)



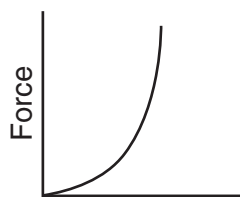
46 A 1.0×10^3 -kilogram car travels at a constant speed of 20. meters per second around a horizontal circular track. Which diagram correctly represents the direction of the car's velocity (v) and the direction of the centripetal force (F_c) acting on the car at one particular moment?



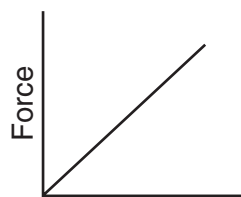
47 Which graph best represents the relationship between the magnitude of the electrostatic force and the distance between two oppositely charged particles?



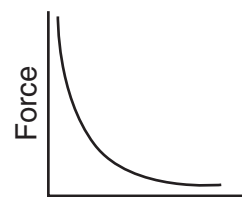
(1)



(2)



(3)



(4)

munotes

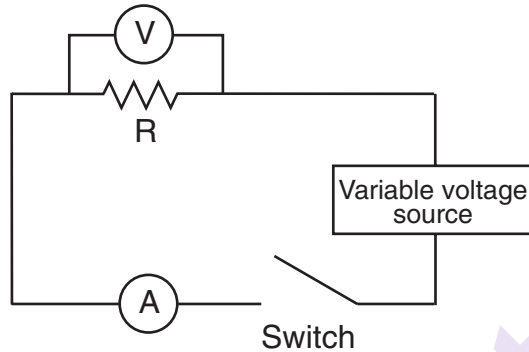
Part B–2

Answer all questions in this part.

Directions (48–61): Record your answers in the spaces provided in your answer booklet.

Base your answers to questions 48 through 51 on the information, circuit diagram, and data table below.

In a physics lab, a student used the circuit shown to measure the current through and the potential drop across a resistor of unknown resistance, R . The instructor told the student to use the switch to operate the circuit only long enough to take each reading. The student's measurements are recorded in the data table.



Data Table

Current (A)	Potential Drop (V)
0.80	21.4
1.20	35.8
1.90	56.0
2.30	72.4
3.20	98.4

Directions (48–50): Using the information in the data table, construct a graph on the grid in *your answer booklet*, following the directions below.

48 Mark an appropriate scale on the axis labeled “Potential Drop (V).” [1]

49 Plot the data points for potential drop versus current. [1]

50 Draw the line or curve of best fit. [1]

51 Calculate the slope of the line or curve of best fit. [Show all work, including the equation and substitution with units.] [2]

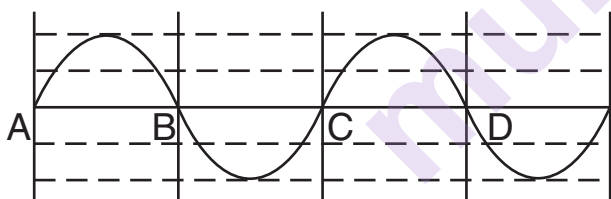
- 52 An electron is accelerated through a potential difference of 2.5×10^4 volts in the cathode ray tube of a computer monitor. Calculate the work, in joules, done on the electron. [Show all work, including the equation and substitution with units.] [2]

- 53 A ray of monochromatic light with a frequency of 5.09×10^{14} hertz is transmitted through four different media, listed below.

- A. corn oil
B. ethyl alcohol
C. flint glass
D. water

Rank the four media from the one through which the light travels at the slowest speed to the one through which the light travels at the fastest speed. (Use the letters in front of each medium to indicate your answer.) [1]

- 54 The diagram below represents a transverse wave moving along a string.



On the diagram in your answer booklet, draw a transverse wave that would produce complete destructive interference when superimposed with the original wave. [1]

- 55 How much energy, in megaelectronvolts, is produced when 0.250 universal mass unit of matter is completely converted into energy? [1]

Base your answers to questions 56 and 57 on the information below.

A car traveling at a speed of 13 meters per second accelerates uniformly to a speed of 25 meters per second in 5.0 seconds.

- 56 Calculate the magnitude of the acceleration of the car during this 5.0-second time interval. [Show all work, including the equation and substitution with units.] [2]

- 57 A truck traveling at a constant speed covers the same total distance as the car in the same 5.0-second time interval. Determine the speed of the truck. [1]

- 58 The gravitational force of attraction between Earth and the Sun is 3.52×10^{22} newtons. Calculate the mass of the Sun. [Show all work, including the equation and substitution with units.] [2]

- 59 What are the sign and charge, in coulombs, of an antiproton? [1]

Base your answers to questions 60 and 61 on the information below.

A lambda particle consists of an up, a down, and a strange quark.

- 60 A lambda particle can be classified as a

- (1) baryon (3) meson
(2) lepton (4) photon

- 61 What is the charge of a lambda particle in elementary charges? [1]

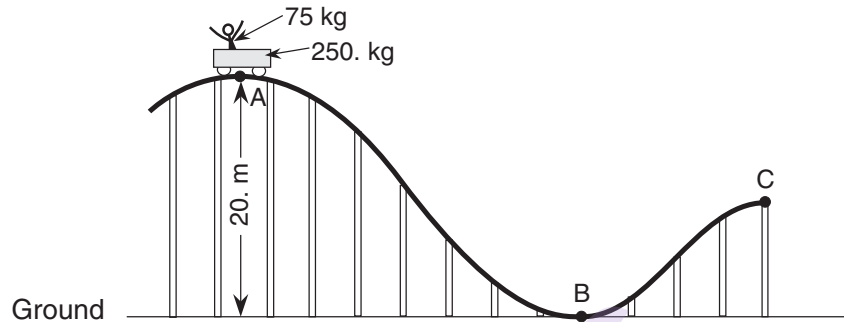
Part C

Answer all questions in this part.

Directions (62–72): Record your answers in the spaces provided in your answer booklet.

Base your answers to questions 62 through 64 on the information and diagram below.

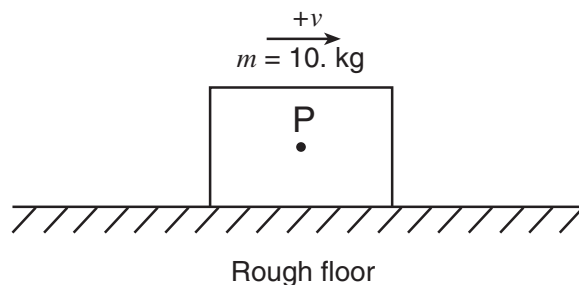
A 250.-kilogram car is initially at rest at point A on a roller coaster track. The car carries a 75-kilogram passenger and is 20. meters above the ground at point A. [Neglect friction.]



- 62 Calculate the total gravitational potential energy, relative to the ground, of the car and the passenger at point A. [Show all work, including the equation and substitution with units.] [2]
- 63 Calculate the speed of the car and passenger at point B. [Show all work, including the equation and substitution with units.] [2]
- 64 Compare the total mechanical energy of the car and passenger at points A, B, and C. [1]
-

Base your answers to questions 65 through 67 on the information and diagram below.

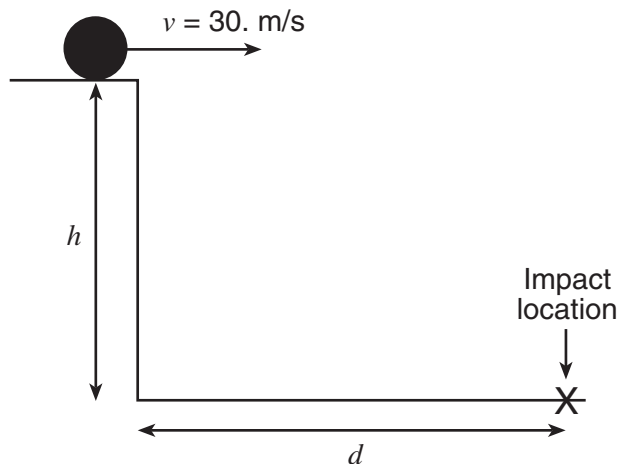
A 10.-kilogram box, sliding to the right across a rough horizontal floor, accelerates at -2.0 meters per second² due to the force of friction.



- 65 Calculate the magnitude of the net force acting on the box. [Show all work, including the equation and substitution with units.] [2]
- 66 On the diagram *in your answer booklet*, draw a vector representing the net force acting on the box. Begin the vector at point P and use a scale of 1.0 centimeter = 5.0 newtons. [2]
- 67 Calculate the coefficient of kinetic friction between the box and the floor. [Show all work, including the equation and substitution with units.] [2]
-

Base your answers to questions 68 through 70 on the information and diagram below.

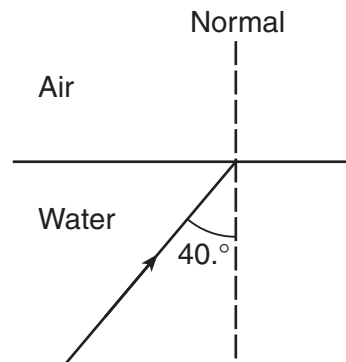
A projectile is launched horizontally at a speed of 30. meters per second from a platform located a vertical distance h above the ground. The projectile strikes the ground after time t at horizontal distance d from the base of the platform. [Neglect friction.]



- 68 On the diagram in your answer booklet, sketch the theoretical path of the projectile. [1]
- 69 Calculate the horizontal distance, d , if the projectile's total time of flight is 2.5 seconds. [Show all work, including the equation and substitution with units.] [2]
- 70 Express the projectile's total time of flight, t , in terms of the vertical distance, h , and the acceleration due to gravity, g . [Write an appropriate equation and solve it for t .] [2]

Base your answers to questions 71 and 72 on the information and diagram below.

A ray of light of frequency 5.09×10^{14} hertz is incident on a water-air interface as shown in the diagram below.



- 71 Calculate the angle of refraction of the light ray in air. [Show all work, including the equation and substitution with units.] [2]
- 72 Calculate the speed of the light while in the water. [Show all work, including the equation and substitution with units.] [2]

Tear Here

The University of the State of New York

REGENTS HIGH SCHOOL EXAMINATION

PHYSICAL SETTING
PHYSICS

Wednesday, June 22, 2005 — 1:15 to 4:15 p.m., only

ANSWER SHEET

Student Sex: ☐ Male ☐ Female Grade

Teacher School

Record your answers to Part A and Part B-1 on this answer sheet.

Part A

- | | | |
|----------|----------|----------|
| 1 | 13 | 25 |
| 2 | 14 | 26 |
| 3 | 15 | 27 |
| 4 | 16 | 28 |
| 5 | 17 | 29 |
| 6 | 18 | 30 |
| 7 | 19 | 31 |
| 8 | 20 | 32 |
| 9 | 21 | 33 |
| 10 | 22 | 34 |
| 11 | 23 | 35 |
| 12 | 24 | |

Part A Score

Part B-1

- | | |
|----------|----------|
| 36 | 42 |
| 37 | 43 |
| 38 | 44 |
| 39 | 45 |
| 40 | 46 |
| 41 | 47 |

Part B-1 Score

Write your answers to Part B-2 and Part C in your answer booklet.

The declaration below should be signed when you have completed the examination.

I do hereby affirm, at the close of this examination, that I had no unlawful knowledge of the questions or answers prior to the examination and that I have neither given nor received assistance in answering any of the questions during the examination.

Signature

Tear Here

munotes

PHYSICAL SETTING PHYSICS

Wednesday, June 22, 2005 — 1:15 to 4:15 p.m., only

ANSWER BOOKLET

Student Sex: ☐ Male ☐ Female

Teacher.....

School Grade

Answer all questions in Part B-2 and Part C. Record your answers in this booklet.


Part	Maximum Score	Student's Score
A	35	
B-1	12	
B-2	18	
C	20	
Total Written Test Score (Maximum Raw Score: 85)		<input type="text"/>
Final Score (From Conversion Chart)		<input type="text"/>
Raters' Initials:		
Rater 1		Rater 2

Part B-2

48-50

Potential Drop vs. Current

Potential Drop (V)



1.0 2.0 3.0 4.0 5.0

Current (A)

51

52

53 _____

54

A	B	C	D

55 _____ MeV

56

57 _____ m/s

58

59 _____ C

60 _____

61 _____ e

Part C

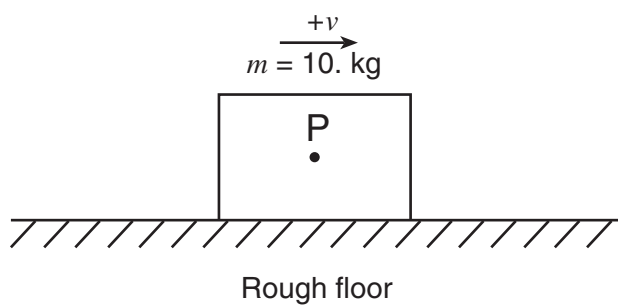
62

63

64 _____

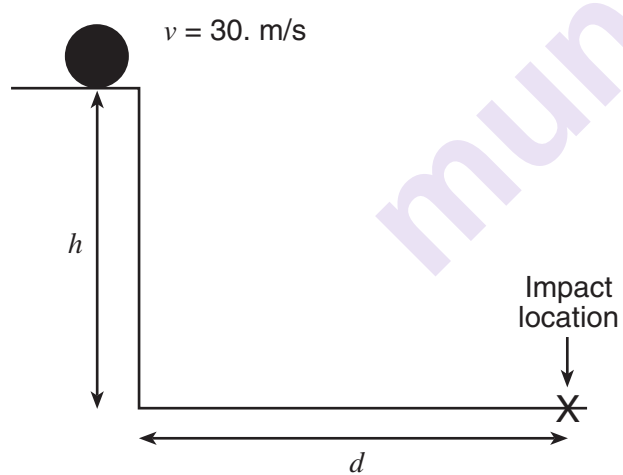
65

66



67

68



69

70

71

72

munotes