

LIVING ENVIRONMENT

The University of the State of New York
REGENTS HIGH SCHOOL EXAMINATION

LIVING ENVIRONMENT

Wednesday, January 25, 2012 — 9:15 a.m. to 12:15 p.m., only

Student Name _____

School Name _____

Print your name and the name of your school on the lines above.

A separate answer sheet for multiple-choice questions in Parts A, B–1, B–2, and D has been provided to you. Follow the instructions from the proctor for completing the student information on your answer sheet.

You are to answer all questions in all parts of this examination. Record your answers for all multiple-choice questions, including those in Parts B–2 and D, on the separate answer sheet. Record your answers for all open-ended questions directly in this examination booklet. All answers in this examination booklet should be written in pen, except for graphs and drawings, which should be done in pencil. You may use scrap paper to work out the answers to the questions, but be sure to record all your answers on the answer sheet or in this examination booklet as directed.

When you have completed the examination, you must sign the declaration printed on your separate answer sheet, indicating that you had no unlawful knowledge of the questions or answers prior to the examination and that you have neither given nor received assistance in answering any of the questions during the examination. Your answer sheet cannot be accepted if you fail to sign this declaration.

Notice...

A four-function or scientific calculator must be made available for you to use while taking this examination.

The use of any communications device is strictly prohibited when taking this examination. If you use any communications device, no matter how briefly, your examination will be invalidated and no score will be calculated for you.

DO NOT OPEN THIS EXAMINATION BOOKLET UNTIL THE SIGNAL IS GIVEN.

Part A

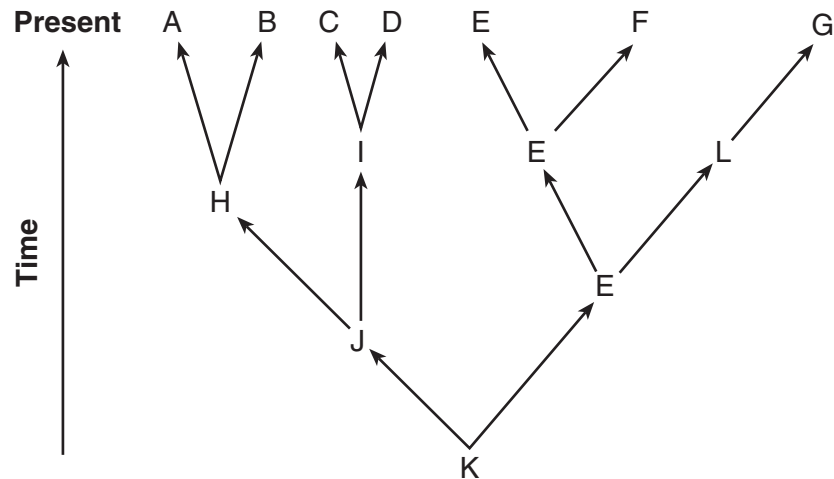
Answer all questions in this part. [30]

Directions (1–30): For *each* statement or question, record on your separate answer sheet the *number* of the word or expression that, of those given, best completes the statement or answers the question.

- 1 Which statement describes an activity of a decomposer?
 - (1) A mushroom digests and absorbs nutrients from organic matter.
 - (2) A sunflower uses nutrients from the soil to make proteins.
 - (3) A snail scrapes algae off rocks in an aquarium.
 - (4) A hawk eats and digests a mouse.
- 2 The calcium concentration in the root cells of certain plants is higher than in the surrounding soil. Calcium may continue to enter the root cells of the plant by the process of
 - (1) diffusion
 - (2) respiration
 - (3) active transport
 - (4) protein synthesis
- 3 Homeostasis is maintained in a single-celled organism by the interaction of
 - (1) organs
 - (2) systems
 - (3) tissues
 - (4) organelles
- 4 Within which structure of an animal cell does DNA replication take place?
 - (1) vacuole
 - (2) cell membrane
 - (3) nucleus
 - (4) ribosome
- 5 The shape of a protein is originally determined by the
 - (1) size of the protein molecule
 - (2) location of the protein within the cell
 - (3) arrangement of amino acids in the protein
 - (4) function the protein must carry out
- 6 Plant cells can synthesize energy-rich organic molecules, and later break them down to extract that energy for performing life processes. These activities require direct interaction between the
 - (1) chloroplasts and vacuoles
 - (2) cell walls and ribosomes
 - (3) chloroplasts and mitochondria
 - (4) ribosomes and mitochondria
- 7 Selective breeding has been used for thousands of years to
 - (1) develop bacteria that produce human insulin
 - (2) clone desirable plant varieties
 - (3) develop viruses that protect against diseases
 - (4) produce new varieties of domestic animals
- 8 A deletion of a DNA segment alters a gene in a single skin cell of an individual. Which statement best describes a result of this mutation?
 - (1) Any cell produced from this skin cell will have the same mutation.
 - (2) All offspring of the individual will have a skin cell mutation.
 - (3) The mutation will spread into other types of cells.
 - (4) The gametes of this individual will have the same mutation.
- 9 Some goats have been genetically modified with a human gene that codes for a blood anticlotting factor. The anticlotting factor can then be extracted from the goat milk and used during surgery. To produce these genetically modified goats, scientists most likely
 - (1) injected the anticlotting factor into the milk-producing glands of the animals
 - (2) added modified DNA into the milk of the animals
 - (3) inserted the human gene into the egg cells of goats
 - (4) altered the nutritional requirements of newborn goats
- 10 Which characteristic is necessary for natural selection to occur in a species?
 - (1) stability
 - (2) variation
 - (3) complex cellular organization
 - (4) a very low mutation rate

- 11 Researchers use a variety of techniques to learn more about the function of a specific gene in an organism. In one type of experiment, called a loss-of-function experiment, the gene being investigated is eliminated. In a gain-of-function experiment, extra copies of the gene being investigated are inserted. The cell process most directly affected in both experiments is
- (1) protein synthesis
 - (2) waste disposal
 - (3) transport of materials
 - (4) breakdown of nutrients
- 12 Plants are green because they contain the protein chlorophyll. A bucket was left on the lawn for one week. When the bucket was removed, the grass under the bucket had turned from green to a yellowish white color. This change is due to the interaction between the grass and
- (1) decomposer organisms in the soil, an abiotic factor
 - (2) the amount of sunlight, an abiotic factor
 - (3) increased moisture under the bucket, a biotic factor
 - (4) the metal composition of the bucket, a biotic factor
- 13 Which statement describes a function of the human male reproductive system?
- (1) It produces gametes in testes.
 - (2) It supplies a fluid that protects the fetus.
 - (3) It provides support for the development of the embryo.
 - (4) It provides nutrient materials through a placenta.
- 14 Exposure to toxins during early stages of pregnancy is more likely to cause birth defects than exposure in late pregnancy because
- (1) essential organs form during early development
 - (2) the uterus provides more protection in late pregnancy
 - (3) the placenta forms during late pregnancy
 - (4) meiosis occurs rapidly during early development
- 15 Although a liver cell and a muscle cell in a human developed from the same single cell, their appearance and functions are different. This is because the liver cell
- (1) contains different genes than the muscle cell
 - (2) expresses different genes than the muscle cell
 - (3) destroys the muscle cell genes it contains
 - (4) lacks the genes found in muscle cells
- 16 Sexual reproduction in a species usually results in
- (1) an increase in the chromosome number in the offspring
 - (2) offspring genetically identical to the parent
 - (3) recombination of genes
 - (4) a decrease in biodiversity
- 17 As water flows downhill, its energy can be used to generate electricity. Later, this water may evaporate, fall as rain, and be used again to generate electricity in the same way. This explains why electricity generated with water is considered
- (1) a source of water pollution
 - (2) a renewable form of energy
 - (3) more expensive than nuclear energy
 - (4) responsible for global warming
- 18 Scientists have found that although plants require light to carry on photosynthesis, very high levels of sunlight can kill some plants. This illustrates that many biochemical processes may occur
- (1) more rapidly when temperatures are very high
 - (2) within a specific range of conditions
 - (3) best in the absence of abiotic factors
 - (4) even if homeostasis is disrupted
- 19 A relationship between a consumer and producer is best illustrated by a
- (1) snake eating a bird
 - (2) tree absorbing minerals
 - (3) fungus breaking down wastes
 - (4) deer eating grass

20 The evolutionary pathways of several species are represented in the diagram below.




Which species was best adapted for survival in changing environmental conditions?

- (1) A
- (2) E

- (3) K
- (4) L

21 The diagram below represents a microscopic view of blood.

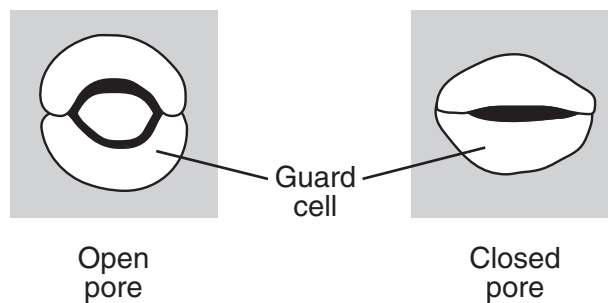


Cell A protects the body by producing specific chemicals in response to pathogens. Cell A is

- (1) a red blood cell
- (2) a bacteria cell

- (3) an insulin-producing cell
- (4) a white blood cell

22 The diagram below represents a change in guard cells that open and close pores in a plant.



This change directly helps to

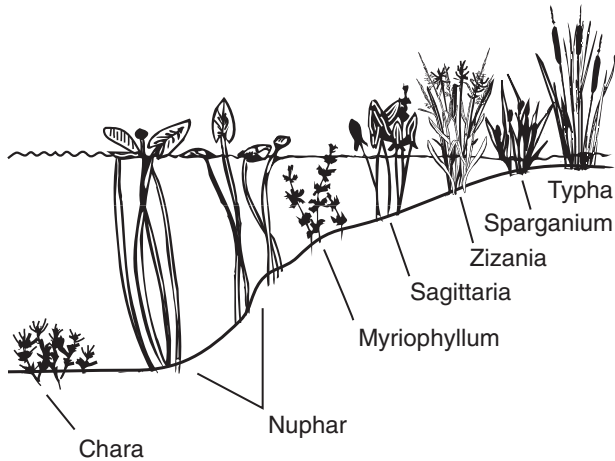
- (1) increase heterotrophic nutrition
- (2) absorb minerals

- (3) regulate water loss
- (4) reduce seed production

23 Which statement represents a characteristic of an ecosystem that is *not* likely to sustain itself?

- (1) The Sun provides the needed energy.
- (2) Energy is transferred from plants to animals.
- (3) There are more consumers than producers.
- (4) There are interactions between biotic and abiotic factors.

24 Which statement best explains why different plant species are found at different water depths as represented in the diagram below?



- (1) Energy flows through ecosystems in one direction, typically beginning with photosynthetic organisms.
- (2) In any particular environment, the growth and survival of organisms is affected by physical conditions.
- (3) Plants on land are higher up the food chain than plants under water.
- (4) Plant cells and some one-celled organisms contain chloroplasts.

25 Some people see the benefit of wind energy as a clean alternative to fossil fuels for energy production. Others believe it is dangerous for migratory birds. These opinions best illustrate that decisions about alternate energy sources

- (1) will usually favor older methods of energy production over newer methods
- (2) must be made by weighing the risks and costs against the benefits
- (3) must be made by taking into account the present needs of the citizens without looking toward the future
- (4) should be the responsibility of each individual

26 One way humans can promote the survival of organisms in an ecosystem is to

- (1) decrease diversity in plant habitats
- (2) introduce new consumers to control autotrophs
- (3) release extra CO₂ into the atmosphere to help autotrophs
- (4) learn about the interactions of populations

27 Environmentalists are hoping to protect endangered organisms by calling for a reduction in the use of pesticides, because loss of these organisms would

- (1) increase the mutation rate in plants
- (2) cause pesticides to become more toxic to insects
- (3) reduce biodiversity in various ecosystems
- (4) decrease the space and resources available to other organisms

28 Which farming practice causes the *least* harm to the environment?

- (1) using natural predators to reduce insect numbers
- (2) adding chemical fertilizers to all the crops in the area
- (3) planting the same crop for 1 year on all the fields in the area
- (4) planting the same crop in the same field each year for 10 years

29 Some bacteria are unable to survive unless a certain nutrient is present in their food supply. After exposure to ultraviolet radiation, some of these bacteria are able to synthesize this nutrient. This change is most likely due to

- (1) increased respiration
- (2) exposure to an antigen
- (3) an alteration in a gene
- (4) gamete formation

30 Which action by humans could improve the quality of the air?

- (1) building homes that use only oil furnaces for heat
- (2) buying cars that get more miles per gallon of gasoline
- (3) increasing the number of coal-burning power plants that generate electricity
- (4) cutting down forests to clear land for factories

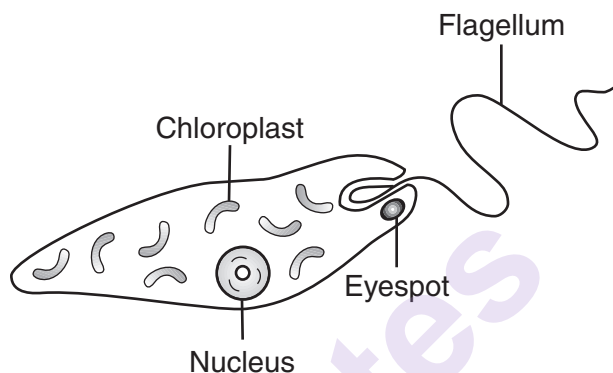
Part B-1

Answer all questions in this part. [13]

Directions (31–43): For *each* statement or question, record on your separate answer sheet the *number* of the word or expression that, of those given, best completes the statement or answers the question.

Base your answers to questions 31 through 33 on the information below and on your knowledge of biology.

Euglena are single-celled organisms that live in ponds. All euglena have chloroplasts and can make their own food. They can also take in food from the environment. The diagram below represents a euglena.

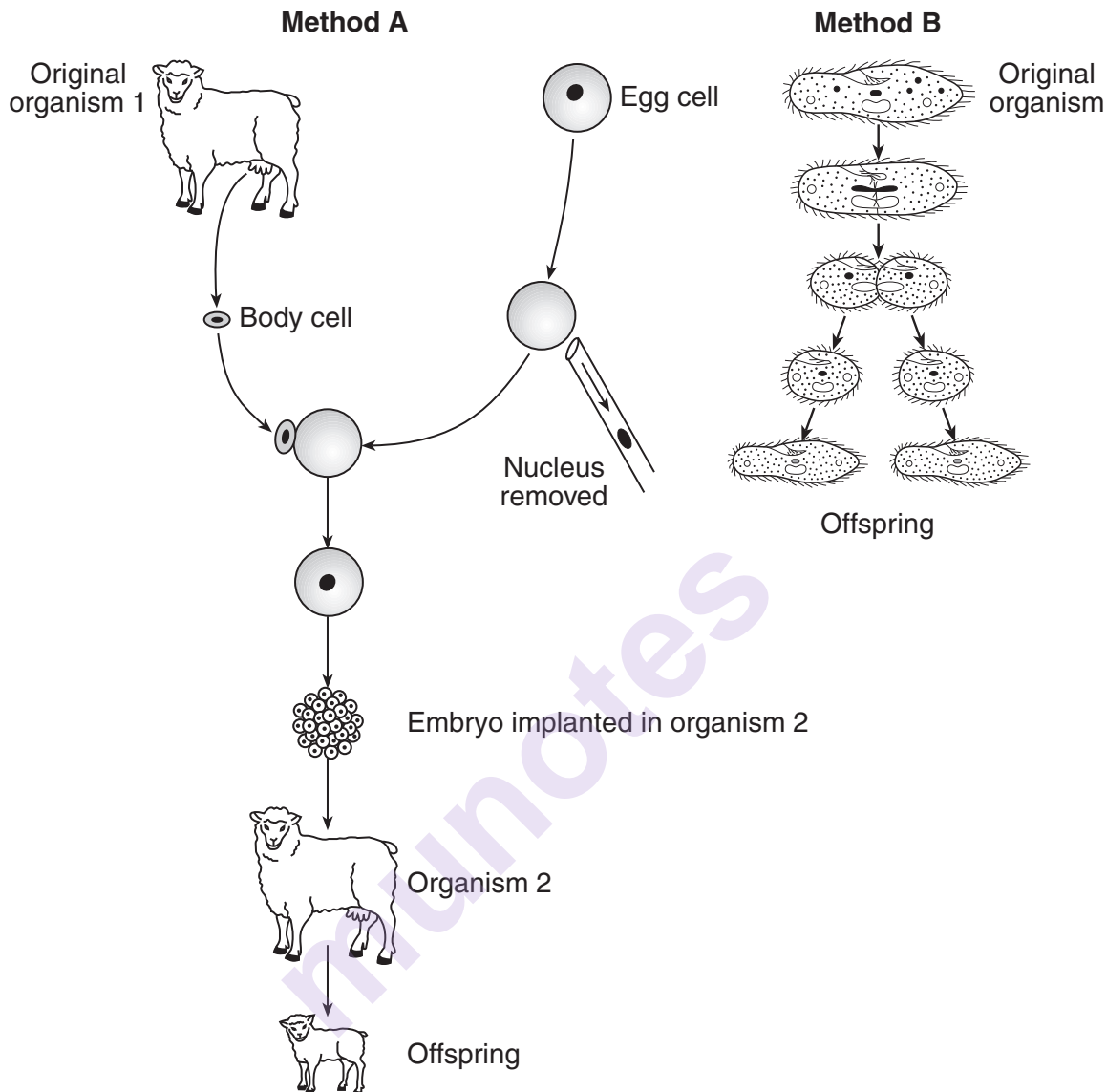


An experiment was set up to determine the effect of nitrates, a pollutant, on the number of chloroplasts present in euglena. Five tanks were set up, each with euglena and a different concentration of nitrate solution: 0%, 0.5%, 1.0%, 1.5%, and 2.0%.

The tanks were placed in a sunny location where each tank received the same amount of light.

- 31 Which statement is a possible hypothesis for this experiment that could be supported by the results of this experiment?
- (1) If the average number of chloroplasts in euglena decreases, will less nitrate be needed in each tank?
 - (2) If the nitrate concentration is increased, then the euglena will have a lower average number of chloroplasts.
 - (3) If the number of euglena in a tank increases, will more nitrates be produced?
 - (4) If the nitrate concentration is decreased, then more light will reduce the average number of chloroplasts in euglena.
- 32 Which statement correctly identifies a variable in this experiment?
- (1) The independent variable is the concentration of nitrate solution used.
 - (2) The dependent variable is the number of euglena placed in the tanks.
 - (3) The independent variable is the amount of sunlight.
 - (4) The dependent variable is the number of tanks used.
- 33 Euglena can be classified as both
- | | |
|------------------------------------|------------------------------------|
| (1) an autotroph and a parasite | (3) a producer and a parasite |
| (2) a decomposer and a heterotroph | (4) an autotroph and a heterotroph |
-

34 Two methods of reproduction are represented in the diagram below.



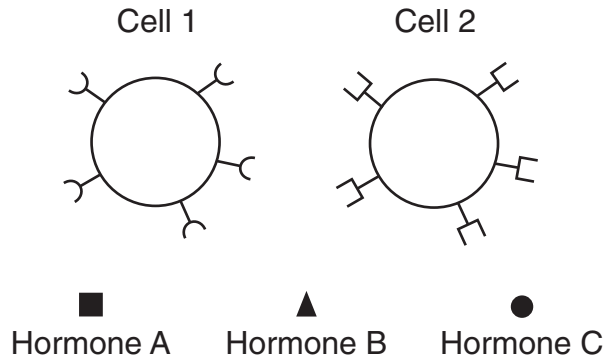
How does the DNA in the offspring produced by these methods compare to the DNA in the original organism?

- (1) The offspring contain half the original number of chromosomes in each method.
- (2) The DNA in the offspring is genetically identical to that of the original organism in both methods.
- (3) The offspring produced by method A contain twice the original number of genes, while those produced by method B contain half the original number of genes.
- (4) The number of DNA bases is less than that of the original organism in method A, but more than the original number in method B.

35 Puppies are often given medicine to eliminate roundworms from their intestines. These worms consume some of the food the puppies have digested. The worms and the puppies represent a relationship known as

- (1) predator–prey
- (2) consumer–producer
- (3) parasite–host
- (4) autotroph–heterotroph

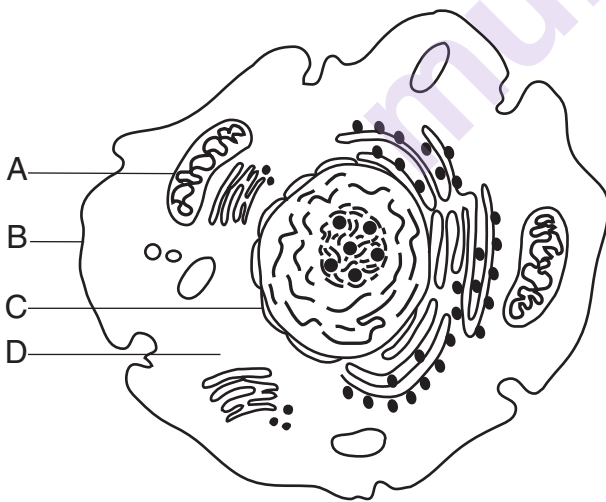
- 36 The diagram below represents cells and hormones present in the human body.



Which statement correctly describes an interaction between the hormones and the cells?

- (1) Hormone A is synthesized by cell 2 and targets cell 1.
- (2) Hormone B bonds with both cell 1 and cell 2.
- (3) Specific reactions carried out by cell 1 are regulated by hormone C.
- (4) The specialized receptor molecules on cell 1 secrete hormone B.

- 37 In the diagram below, which letter indicates the part of the cell that carries out a function most similar to a function of the human excretory system?

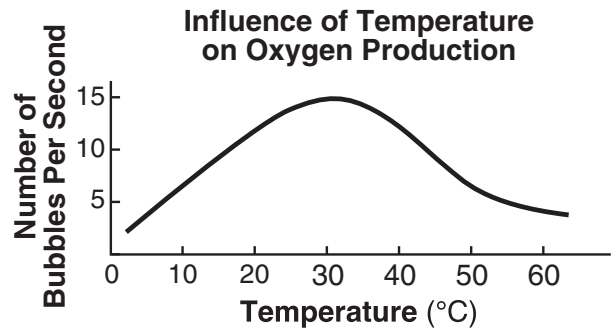


- (1) A
- (2) B
- (3) C
- (4) D

- 38 In a DNA sample, 15% of the bases are thymine (T). What percentage of the bases in this sample are adenine (A)?

- (1) 15%
- (2) 30%
- (3) 35%
- (4) 85%

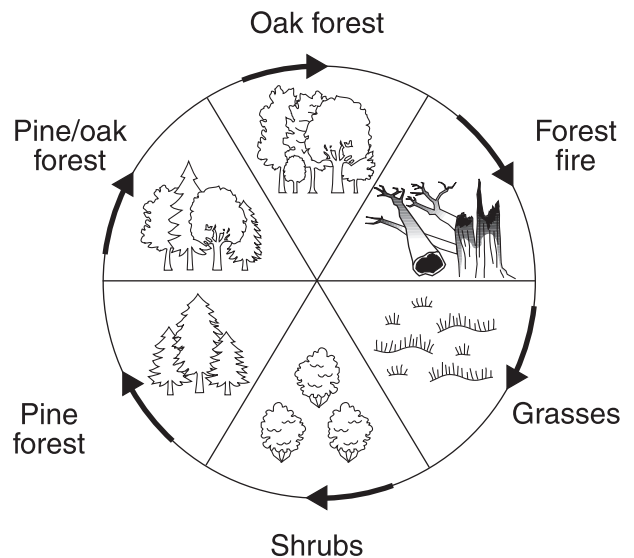
- 39 The graph below shows the results of an action of the enzyme catalase on a piece of meat. Evidence of enzyme activity is indicated by bubbles of oxygen.



Which statement best summarizes the activity of catalase shown in the graph?

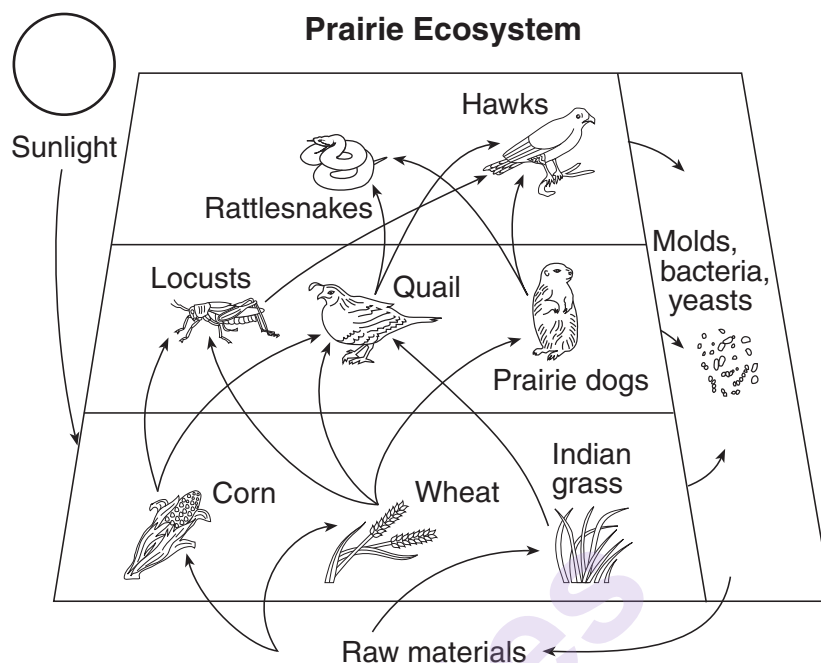
- (1) The enzyme works better at 10°C than at 50°C.
- (2) The enzyme works better at 5°C than at 65°C.
- (3) The enzyme works better at 35°C than at either temperature extreme.
- (4) The enzyme works at the same level in all environments.

- 40 Which process is represented in the diagram below?



- (1) energy flow
- (2) biological evolution
- (3) cellular communication
- (4) ecological succession

Base your answers to questions 41 and 42 on the diagram below and on your knowledge of biology. The diagram represents various levels of interaction between organisms in a prairie ecosystem.



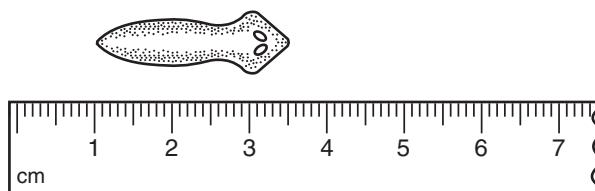
41 If the amount of carbon dioxide in the atmosphere were to decrease, which organism in the diagram would be one of the first affected by this change?

- | | |
|-----------|-------------|
| (1) hawks | (3) locusts |
| (2) wheat | (4) molds |

42 Which statement best describes a function of the molds, bacteria, and yeasts in this ecosystem?

- (1) They convert light energy into chemical energy.
- (2) They carry out a food-making process, using inorganic raw materials.
- (3) They break down dead organisms, releasing raw materials to the environment.
- (4) They act as catalysts to speed up the energy flow between organisms.

43 The diagram below represents the measurement of a biological specimen.



What is the approximate length of the specimen in millimeters?

- | | |
|-----------|-----------|
| (1) 25 mm | (3) 35 mm |
| (2) 30 mm | (4) 40 mm |

Part B-2

Answer all questions in this part. [12]

Directions (44–55): For those questions that are multiple choice, record on your separate answer sheet the *number* of the choice that, of those given, best completes each statement or answers each question. For all other questions in this part, follow the directions given and record your answers in the spaces provided in this examination booklet.

Base your answers to questions 44 through 48 on the information and data table below and on your knowledge of biology.

Diabetes is a disease characterized by consistently high blood glucose levels (at or above 126 mg/100 mL) as a result of hormone deficiency. For a study of diabetes, blood glucose levels from individual A and individual B were recorded each hour over a 5-hour period following a meal. The results are shown in the data table below.

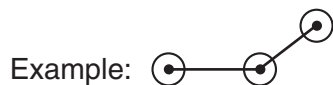
Blood Glucose Levels
(mg/100 mL)

Hours	Individual A	Individual B
0	135	90
1	175	122
2	200	110
3	185	87
4	165	85
5	150	90

Directions (44–46): Using the information in the data table, construct a line graph on the grid on the next page, following the directions below.

44 Mark an appropriate scale, without any breaks, on each labeled axis. [1]

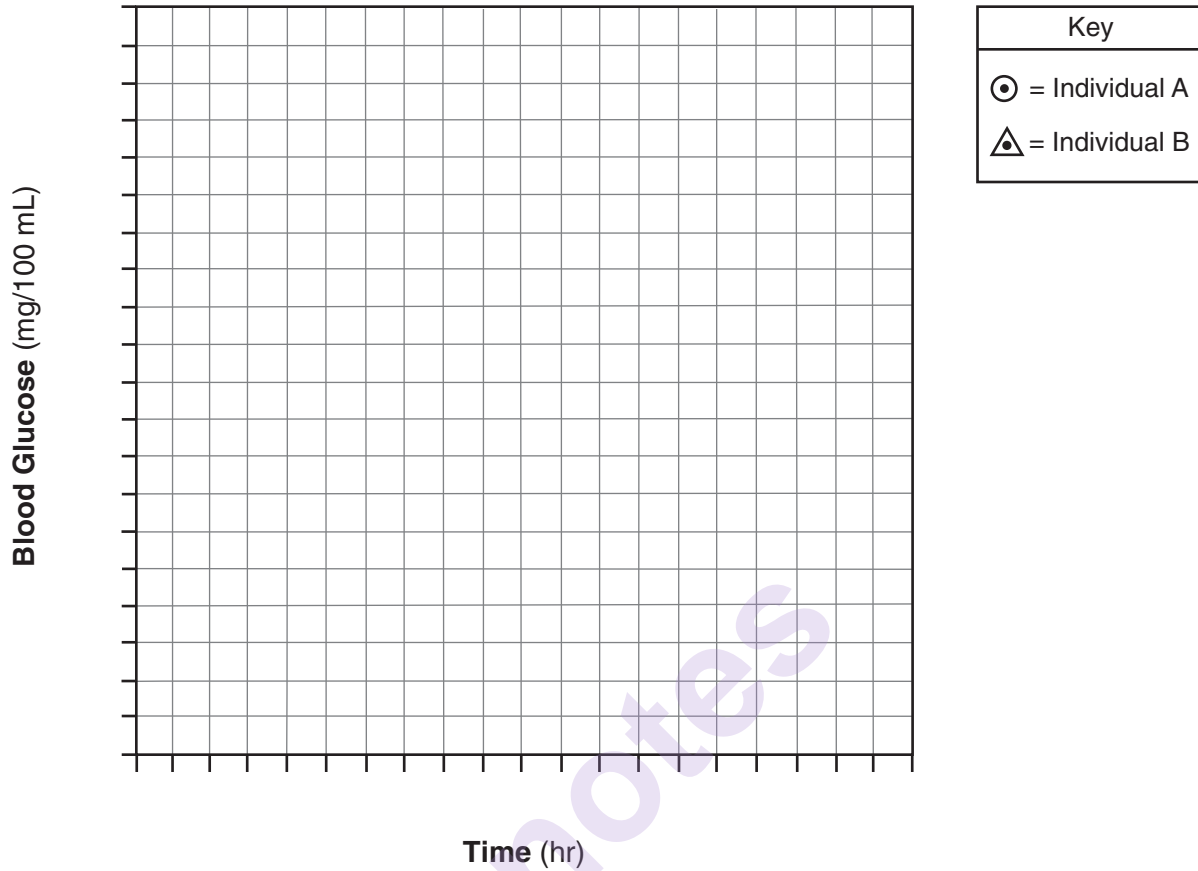
45 Plot the data for individual A on the grid, surround each point with a small circle, and connect the points. [1]



46 Plot the data for individual B on the grid, surround each point with a small triangle, and connect the points. [1]



Blood Glucose Levels



Note: The answer to question 47 should be recorded on your separate answer sheet.

47 Which individual most likely has diabetes?

- (1) *A*
- (2) *B*

- (3) both *A* and *B*
- (4) neither *A* nor *B*

48 Identify *one* hormone associated with the maintenance of blood glucose levels. [1]

Base your answers to questions 49 and 50 on the food chain and information below. The food chain involves organisms in Yellowstone National Park.

Grasses → Elk → Wolves

Wolves in the park were killed or driven off by humans in the 1920s and 1930s. In the winter of 1995, humans released 17 wolves from Canada into the park. A year later, 14 more wolves were released.

Note: The answers to questions 49 and 50 should be recorded on your separate answer sheet.

49 One possible reason that the wolves were released into the park was to

- | | |
|-------------------------------------|---------------------------------------|
| (1) eliminate unwanted autotrophs | (3) provide food for small predators |
| (2) reduce an overpopulation of elk | (4) increase the number of herbivores |

50 After the wolves were released, the populations of some scavengers increased. This was most likely due to

- | | |
|---|---|
| (1) a reduction in predator populations | (3) an increase in the number of dead elk |
| (2) a decrease in the number of grasses | (4) an increase in water supplies |
-

Base your answer to question 51 on the information below and on your knowledge of biology.

Dissolved oxygen (DO) can be found in an aquatic ecosystem and is often one factor that affects the size of populations of aquatic organisms. Water temperature is very important in determining the amount of DO in a water supply. The colder the temperature of the water, the more DO the water can hold.

51 State *one* possible reason why the biodiversity of an aquatic ecosystem could *decrease* if the water temperature were to increase. Support your answer. [1]

Base your answers to questions 52 through 54 on the passage below and on your knowledge of biology.

Polio is a virus that can cause paralysis or death. At its peak, the disease affected about 500,000 people a year worldwide before the development of an effective vaccine in 1955.

When the first polio vaccine was developed, it was tested in experiments using thousands of children as subjects. The children were injected with either the experimental vaccine or given a harmless injection without the vaccine. Only after these extensive tests was the vaccine finally accepted as being successful in preventing the disease.

Although, at this time, polio has been nearly eliminated in the Western Hemisphere, certain countries in the world still report new cases of the disease. Complete elimination of the disease can be achieved in these countries by vaccinating all of the children at the same time with the polio vaccine.

52 Identify the substance in the polio vaccine that makes it effective. [1]

53 Describe how the body responds to the vaccine, making it effective against a particular disease. [1]

54 Explain why the children in the first testing of the polio vaccine were *not* all given an injection of the experimental vaccine. [1]

Base your answer to question 55 on the information below and on your knowledge of biology.

In many areas, there are some small mammals whose fur color is influenced by temperature. In these animals, the trait for fur color is expressed only if the air temperature is above a certain level. In cold weather, when the ground is covered with snow, the trait is not expressed and the fur color is white.

55 Explain how the fur color change trait may help the small mammals survive. [1]

Part C

Answer all questions in this part. [17]

Directions (56–72): Record your answers in the spaces provided in this examination booklet.

Base your answer to question 56–60 on the information below and on your knowledge of biology.

New varieties of organisms have resulted from human activities. These organisms have often led to problems in modern society. Two of these new varieties are listed below.

Antibiotic-resistant bacteria

Pesticide-resistant insects

56–60 Select *one* of these varieties and discuss a problem associated with the development of this new variety of organism. In your answer, be sure to:

- identify the variety you selected
- identify *one* biological process by which a population of this variety may develop resistance [1]
- describe how this process is involved in the production of a population of resistant organisms [1]
- identify *one* problem caused by this resistance [1]
- state *one* solution to this problem [1]
- identify *one* possible *negative* effect of this solution [1]

Variety: _____

Base your answer to question 61–63 on the passage below and on your knowledge of biology.

Green Tea & Acne

Green tea might be an effective treatment for acne, according to a study by researchers from Memorial Medical Center in the Philippines, reported by United Press International (UPI). The study showed that 3 percent green tea cream is comparable to 4 percent benzoyl peroxide in the treatment of moderate to severe acne.

Green tea has been shown to fight bacteria, reduce inflammation and decrease hormone activity — three characteristics that make the ancient tea an excellent candidate for an acne therapy.

In the study, one group of subjects applied benzoyl peroxide cream twice daily for 12 weeks and another used green tea extract cream twice daily for the same period. Patients received identical bottles of cream and were unaware of the type of treatment they were assigned. The researchers noted the green tea cream seemed to lighten patients' [acne] and improve the overall appearance of their complexion.

The preliminary data suggest green tea extract cream causes fewer side effects than benzoyl peroxide treatment. Patients in the green tea group reported fewer cases of dry skin, itching and allergic responses. Azucena Arguelles, MD, a private practice dermatologist from Mountain View, CA, told UPI that the findings, while promising, are not yet substantial enough to change clinical practice.

Advance for Nurses, Nov. 10, 2003,
"Green Tea & Acne," www.advanceweb.com

61–63 Explain how this experiment can be used to develop a new treatment for acne. In your answer, be sure to:

- identify the organism targeted by green tea [1]
- identify *one* advantage of using green tea extract instead of benzoyl peroxide cream to treat acne [1]
- state *one* reason why, even though the findings are promising, they are “not yet substantial enough to change clinical practice” [1]

Base your answers to questions 64 and 65 on the information below and on your knowledge of biology.

Raw eggs and undercooked poultry may contain *Salmonella* bacteria. These bacteria can cause food poisoning by invading the cells lining the small intestine and producing a toxin that causes inflammation in the intestine. Symptoms usually appear 24 to 48 hours after the bacteria are ingested. Symptoms include fever, diarrhea, vomiting, dehydration, and abdominal pain that may last for several days.

64 Explain why *Salmonella* bacteria are described as pathogens. [1]

65 State *one* possible reason why the symptoms of food poisoning do not appear for 24 to 48 hours after eating food contaminated with *Salmonella* bacteria. [1]

66–68 A student was visiting a friend at her home. Her friend owned two cats. After playing with the cats for a while, the student began to sneeze. Her nose began to run and her eyes became red, watery, and itchy. It also became hard for her to breathe. A few minutes after leaving her friend's home, the symptoms disappeared.

Provide a biological explanation for the symptoms the girl developed at her friend's house. In your response, be sure to:

- identify the body system that was responsible for triggering the reaction she experienced [1]
- identify the type of reaction the student was most likely experiencing [1]
- state *one* reason why her symptoms are *not* likely due to an infectious agent [1]

Base your answer to question 69–72 on the information below and on your knowledge of biology.

Environmentalists and public health experts are warning the public about some chemicals that they come in contact with daily, such as PBDEs and phthalates. PBDEs are used to make children’s clothing flame retardant and phthalates are used to manufacture many plastic bottles, toys, and cosmetics. Both of these chemicals accumulate in the body and endanger health.

In one family tested, the young children had PBDE levels seven times that of their parents. These levels were two to three times the levels that caused thyroid problems in animals. Animal studies have shown that phthalates cause reproductive defects. Even at low levels, phthalates may contribute to infertility and impaired testes in males. Both chemicals can cause nervous system damage.

Biomonitoring is a technology used to test for levels of industrial chemicals found in the body. The technology is less than ten years old, but results from animal studies led some countries to ban PBDEs in 2004.

Presently, the United States EPA (Environmental Protection Agency) does not require chemical manufacturers to conduct human toxicity studies prior to approval for use. If concerns regarding risk or exposure arise during the approval process, the EPA can ask for additional testing. Additional testing occurs for approximately 10 percent of the new chemicals submitted each year. The EPA has also set up voluntary testing programs with major chemical manufacturers to rate some of the 3,000 most widely used chemicals.

69–72 The use of industrial chemicals, such as PBDEs and phthalates, provides both advantages and disadvantages. Discuss the *disadvantages* of using these chemicals. In your answer, be sure to:

- state *one* specific reason why public health officials are concerned about the use of these chemicals [1]
- identify the technique used to determine exposure levels to these chemicals in humans [1]
- state *one* possible reason why young children might have higher levels of exposure to these chemicals than do adults [1]
- state *one* possible reason why chemical manufacturers might participate in the voluntary testing programs set up by the EPA [1]

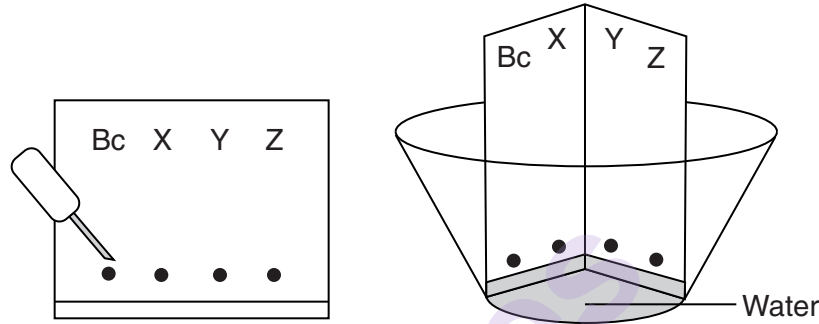
Part D

Answer all questions in this part. [13]

Directions (73–85): For those questions that are multiple choice, record on your separate answer sheet the *number* of the choice that best completes the statement or answers the question. For all other questions in this part, follow the directions given and record your answers in the spaces provided in this examination booklet.

Note: The answer to question 73 should be recorded on your separate answer sheet.

73 The materials represented in the diagram below were used in a laboratory activity.



These materials were used to carry out the technique known as

- (1) DNA staining
- (2) genetic engineering
- (3) paper chromatography
- (4) glucose testing

Note: The answer to question 74 should be recorded on your separate answer sheet.

74 A coverslip should be slowly lowered from a 45° angle onto a slide in order to

- (1) prevent the slide from being scratched
- (2) stop the loss of water from under the coverslip
- (3) ensure that the specimen being viewed will stay alive
- (4) reduce the formation of air bubbles

Note: The answer to question 75 should be recorded on your separate answer sheet.

75 A substance is most likely to diffuse into a cell when

- (1) it is a large organic food molecule such as protein or starch
- (2) it is enclosed in an organelle such as a vacuole
- (3) the concentration of the substance is greater outside the cell than inside
- (4) the pH of the substance is greater than the pH of the cell

Base your answers to questions 76 and 77 on the information and data table below and on your knowledge of biology.

Five students design an experiment to answer the question: “How is heart rate affected by running?” Two chairs were set up at different ends of a large room. The pulse rate of each student was taken at rest just before running. Each of the five students ran between the chairs a different number of times. Their pulse rates were taken after running and the results are shown in the table below.

Effect of Running on Heart Rate

Student	Number of Times the Student Ran Between the Chairs	Pulse Rate After Running (beats/min)
A	2	88
B	4	96
C	6	104
D	8	112
E	10	120

Note: The answer to question 76 should be recorded on your separate answer sheet.

76 If a control group is *not* included in an experiment, it would be difficult to

- | | |
|--|---------------------------------|
| (1) formulate a hypothesis for the experiment | (3) record data in a data table |
| (2) make observations about the experimental group | (4) draw a valid conclusion |

77 Explain how the change in heart rate helps to maintain homeostasis during exercise. [1]

Base your answers to questions 78 through 80 on the information below and on your knowledge of biology.

The sequences below represent the same portions of a DNA molecule from the same gene used by a student to study the relationship between two plant species. A biological catalyst that recognizes the CCGG site is used to cut the DNA molecules into pieces. The catalyst cuts the DNA between the C and G of the site.

78 Draw lines in the sequences below for species 1 and species 2 to show where the catalyst would cut the DNA. [1]

Species 1: T A C C G G A T T A G T T A T G C C G G A T C G

Species 2: T A C G G A T G C C G G A T C G G A A A T T C G

79 Complete the data table below to show the results of the action of the catalyst. [1]

Results of Catalyst Action

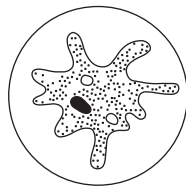
	Number of Cuts	Number of Resulting Pieces of DNA
Species 1		
Species 2		

80 Are the two species of plants closely related? Support your answer. [1]

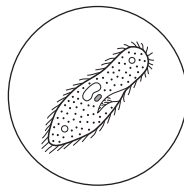
Base your answer to question 81 on the information and diagrams below and on your knowledge of biology.

The drawings below were made during a laboratory exercise in which a microscope was used to view slides of preserved protozoa. The microscope had a 10× eyepiece and two different objectives.

Organism A
viewed with
10× objective



Organism B
viewed with
40× objective



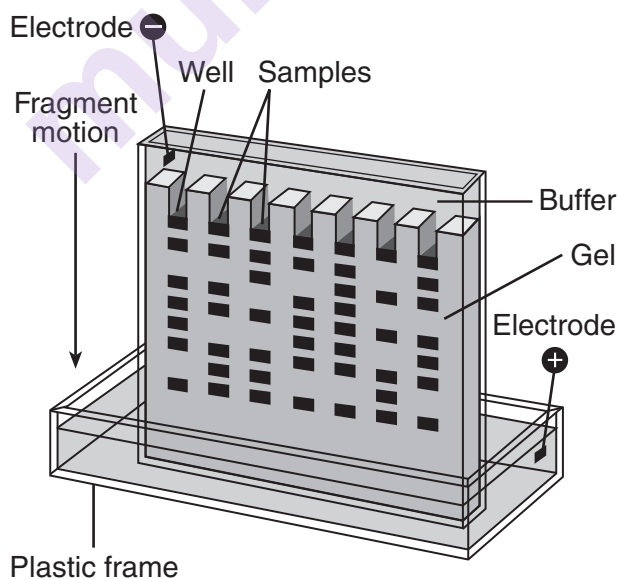
Note: The answer to question 81 should be recorded on your separate answer sheet.

81 Which statement about the size of the organisms is correct?

- (1) Organism A is larger than organism B.
- (2) Organism B is larger than organism A.
- (3) Organisms A and B are both the same size.
- (4) The relative size of the organisms cannot be determined from the information given.

Note: The answer to question 82 should be recorded on your separate answer sheet.

82 A student performed a gel electrophoresis experiment. The results are represented in the diagram below.

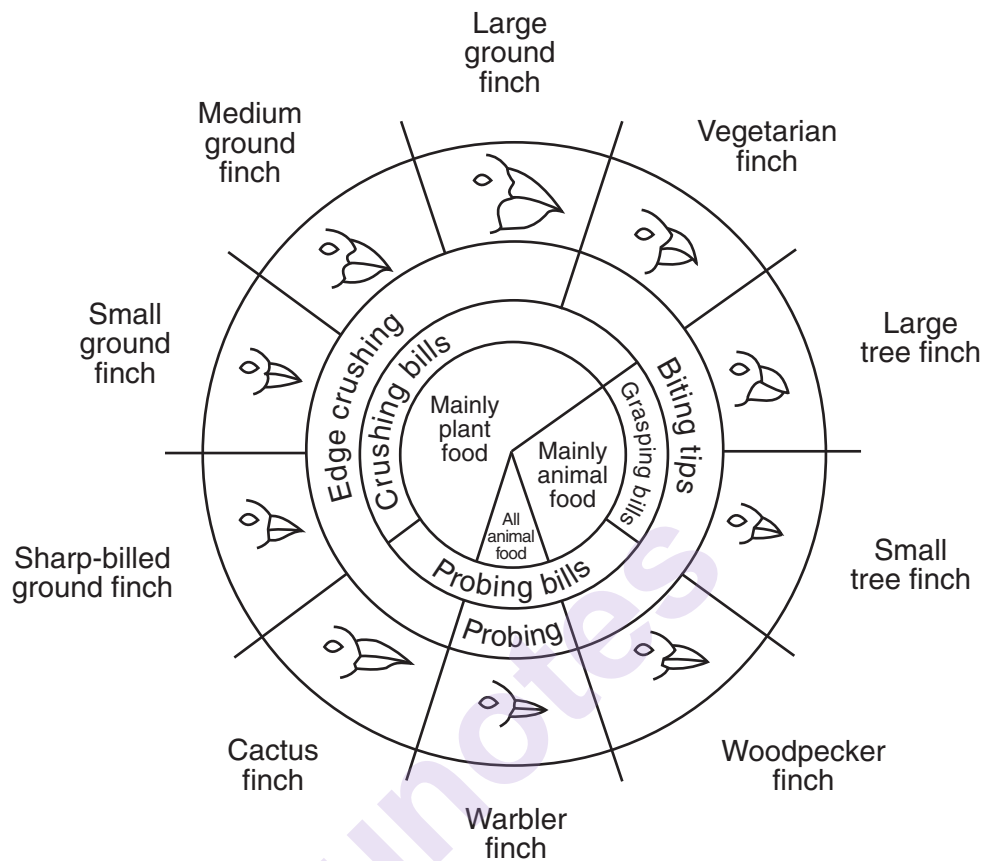


Compared to the fragments at the top of the gel, the fragments at the lower end are

- (1) larger, and move slower
- (2) larger, and move faster
- (3) smaller, and move faster
- (4) smaller, and move slower

Base your answers to questions 83 through 85 on the diagram below and on your knowledge of biology.

Variations in Beaks of Galapagos Islands Finches



from: *Galapagos: A Natural History Guide*

- 83 On an island populated by both warbler finches and small tree finches, there is a significant decrease in the amount of animal food. Which finch population would *decrease* more? Support your answer. [1]

Finch population: _____

- 84 Identify *one* species of finch that would most likely survive a sudden change in climate that destroyed seeds with small, thin coverings, leaving only seeds with large, thick coverings. Support your answer. [1]

Species of finch: _____

- 85 An island has populations of both the cactus finch and sharp-billed ground finch. Explain how these finches can live on the same island even though these finches have similar beaks and both eat plants. [1]

munotes

munotes