

Time: 3 hours

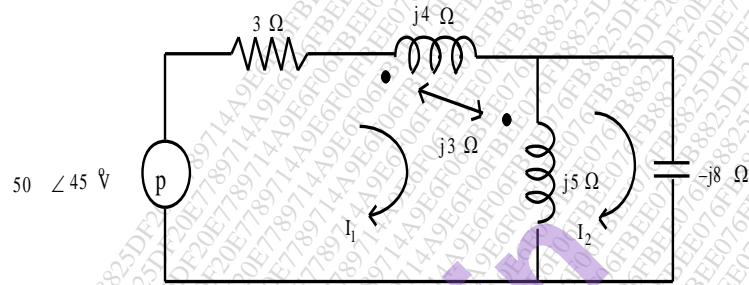
Total Marks: 80

N.B.

- 1) Question No. 1 is Compulsory
- 2) Out of remaining questions, attempt any three
- 3) Assume suitable data if required
- 4) Figures to the right indicate full marks

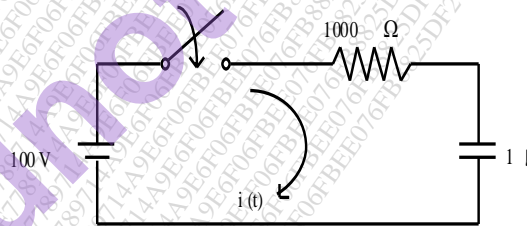
- 1 (A) Draw equivalent circuit for given magnetically coupled circuit.

05



- (B) In the network of Fig. switch is closed at $t = 0$. With capacitor uncharged, find value for i and $\frac{di}{dt}$ at $t = 0^+$.

05



- (C) Prove that $AD - BC = 1$ for Transmission parameters.

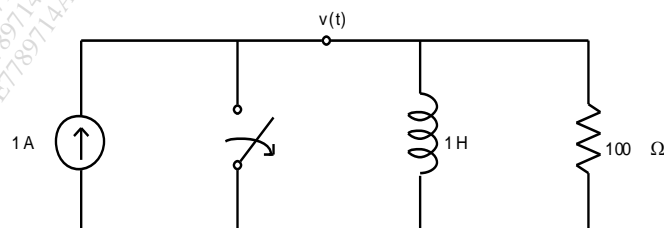
05

- (D) Design an m -derived T section high pass filter with a cut-off frequency of 2 kHz. Design impedance of 700Ω and $m = 0.6$.

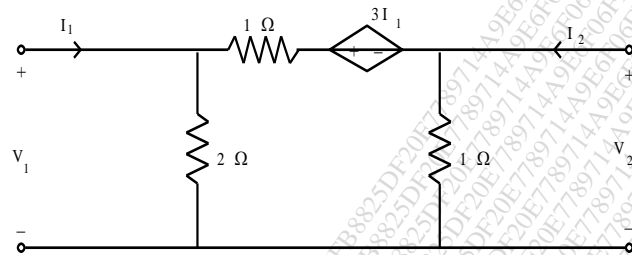
05

- 2 (A) In the network shown in Fig., at $t = 0$, switch is opened. Calculate v , $\frac{dv}{dt}$, $\frac{d^2v}{dt^2}$ at $t = 0^+$.

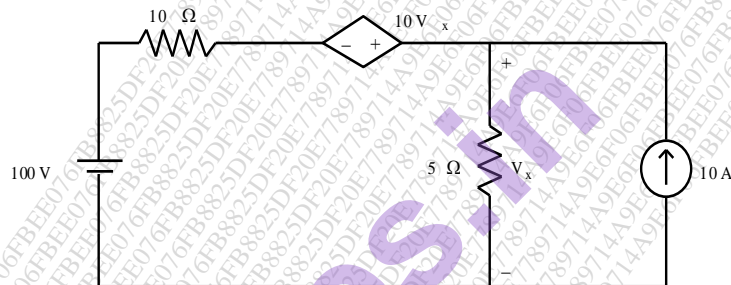
10



- (B) For the network shown in Fig., find Y and Z-parameters. 10



- 3 (A) Determine the current through 10 Ω resistor in the network of Fig. 10

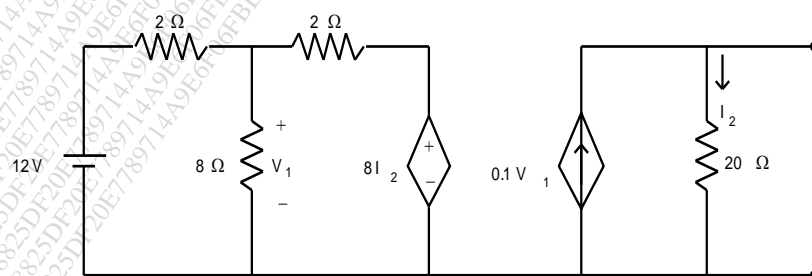


- (B) The parameters of a transmission lines are $R = 65\Omega/\text{km}$, $L=1.6\text{mH}/\text{km}$, $G = 2.25$ 10
 mmho/km , $C=0.1\mu\text{F}/\text{km}$. Find
 i) Characteristic Impedance
 ii) Propagation Constant
 iii) Attenuation Constant
 iv) Phase Constant at 1 kHz

- 4 (A) Determine whether following functions are positive real 10

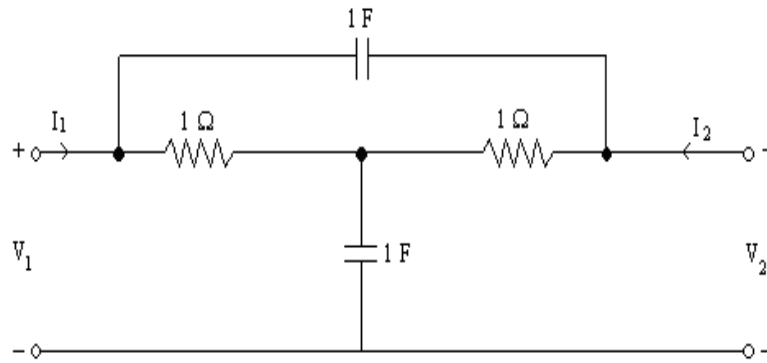
i) $\frac{s^2 + 2s + 4}{(s + 1)(s + 3)}$
 ii) $\frac{s^2 + 25s + 25}{s + 4}$

- (B) Find Norton's equivalent network. 10



- 5 (A) Find Y-parameters for the network shown in Fig.

10



- (B) Realize the following functions in Foster II and Cauer I form

10

$$Z(s) = \frac{2(s^2 + 1)(s^2 + 9)}{s(s^2 + 4)}$$

- 6 (A) A transmission line has a characteristics impedance of 50 ohm and terminate in a load $Z_L = 25 + j50$ ohm. Use smith chart and Find VSWR and Reflection coefficient at the load.

10

- (B) Determine current $i_2(t)$ in the network of Fig., when switch is closed at $t = 0$. The inductor is initially deenergized.

10

